
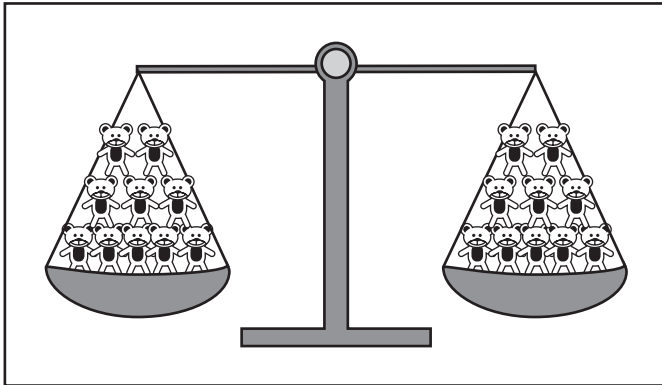






Repasando

1. ¿Cuál de las siguientes balanzas muestra que el 10 es mayor que el 8? Píntala.



2. Escribe el número que falta para que se cumpla la igualdad.

$$11 - 11 = 14 - \underline{\quad}$$

$$7 + 6 = 15 - \underline{\quad}$$

$$\underline{\quad} + 5 = 12 - 4$$

$$\underline{\quad} + 11 = 17 + 3$$

$$8 + \underline{\quad} = 13 - 0$$

$$8 - 4 = \underline{\quad} - 6$$

$$20 - 10 = \underline{\quad} + 9$$

$$3 + 11 = 7 + \underline{\quad}$$

$$14 + 6 = 16 + \underline{\quad}$$

$$15 - \underline{\quad} = 5 + 7$$

$$20 - 10 = 13 - \underline{\quad}$$

$$\underline{\quad} + 9 = 10 + 8$$