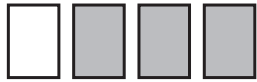




Ejercitando las fracciones

Encierra en un la fracción que corresponde a la parte pintada de gris.



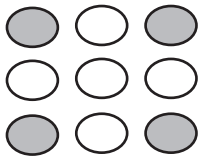
$\frac{1}{3}$ $\frac{3}{4}$ $\frac{1}{4}$



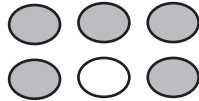
$\frac{3}{8}$ $\frac{5}{8}$ $\frac{3}{5}$



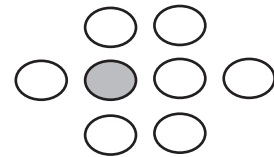
$\frac{1}{3}$ $\frac{2}{3}$ $\frac{1}{2}$



$\frac{5}{4}$ $\frac{4}{9}$ $\frac{5}{9}$



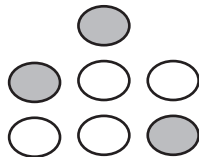
$\frac{5}{6}$ $\frac{1}{6}$ $\frac{1}{5}$



$\frac{7}{8}$ $\frac{1}{7}$ $\frac{1}{8}$



$\frac{2}{5}$ $\frac{2}{3}$ $\frac{3}{5}$



$\frac{3}{4}$ $\frac{4}{7}$ $\frac{3}{7}$



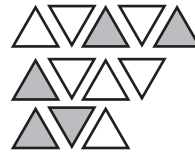
$\frac{1}{2}$ $\frac{2}{3}$ $\frac{1}{3}$



$\frac{2}{5}$ $\frac{2}{5}$ $\frac{5}{7}$



$\frac{5}{7}$ $\frac{2}{7}$ $\frac{2}{5}$



$\frac{7}{12}$ $\frac{5}{7}$ $\frac{5}{12}$