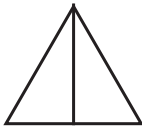




Más fracciones

En cada figura, pinta la parte que corresponde a la fracción indicada.

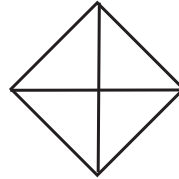
$\frac{1}{2}$




$\frac{5}{6}$




$\frac{2}{4}$



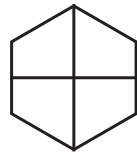
$\frac{2}{5}$



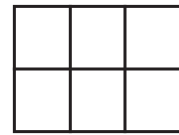
$\frac{3}{4}$



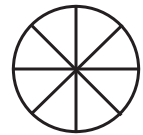
$\frac{1}{4}$




$\frac{2}{6}$



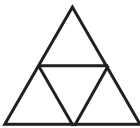
$\frac{5}{8}$



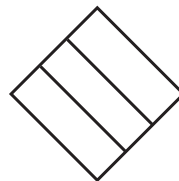
$\frac{1}{2}$




$\frac{1}{4}$



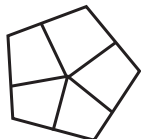
$\frac{1}{3}$




$\frac{1}{5}$




$\frac{3}{5}$



$\frac{2}{3}$



$\frac{5}{5}$



$\frac{3}{4}$

