





Ejercitando la resta


Cuenta y resta. Sigue el ejemplo.



$$10 - 2 = \boxed{8}$$




$$10 - 3 = \boxed{}$$




$$10 - 4 = \boxed{}$$


Pinta con negro los dientes que ha perdido cada niño o niña y luego, anota cuántos dientes le quedaron.




$$10 - 0 = \boxed{}$$




$$10 - 1 = \boxed{}$$




$$10 - 2 = \boxed{}$$



$$10 - 3 = \boxed{}$$



$$10 - 4 = \boxed{}$$



$$10 - 5 = \boxed{}$$