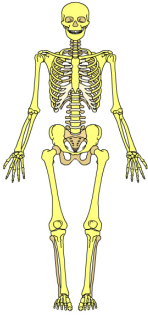




Sistemas del cuerpo humano

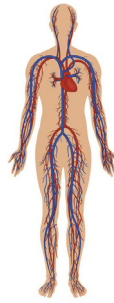
Identifica los siguientes sistemas del cuerpo humano y escribe su nombre en la línea.



sistema _____



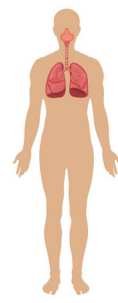
sistema _____



sistema _____

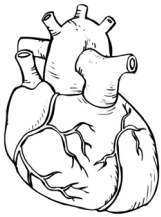


sistema _____

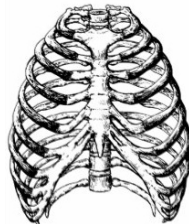


sistema _____

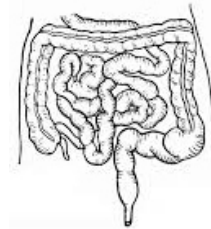
Completa, escribiendo el nombre del sistema al que corresponde cada órgano:



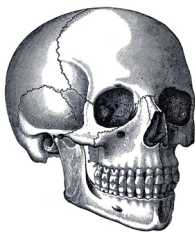
corazón
sistema _____



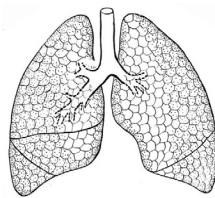
caja torácica
sistema _____



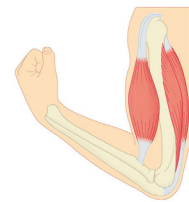
intestinos
sistema _____



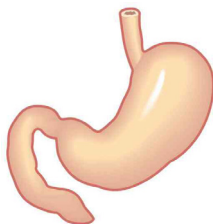
cráneo
sistema _____



pulmones
sistema _____



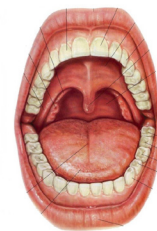
bíceps
sistema _____



estómago
sistema _____



gemelos
sistema _____



boca
sistema _____